
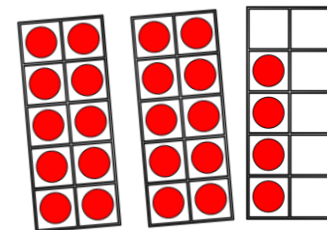


Flashback 4

1) How many fingers?



20




2) Use full or empty to complete the sentence.



The glass is full.

3) Who is shorter? Amir or Ron?

Ron



Amir


Ron

4) What is twelve take away three?

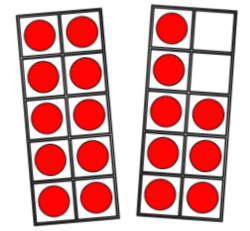
nine

Flashback 4

1) How many cupcakes?



40



2) Which bottle contains more juice? A or B?



A



B

A

3) Complete the sentence using shorter or longer.

The blue line is longer than the red line.




4) Add 3 and 8 together. ||

Flashback 4

- 1) There are 10 flowers in each bunch.
How many flowers are there altogether?



50



- 2) The bowl is empty. (full or empty?)



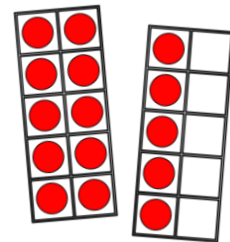
- 3) The tree is taller than the house. (taller or shorter?)



- 4) Find the total of 4 and 7. ||

Flashback 4


1) There are 5 groups of 2 fish.



2) One  fills 

How many blue buckets can I fill with  ? 6

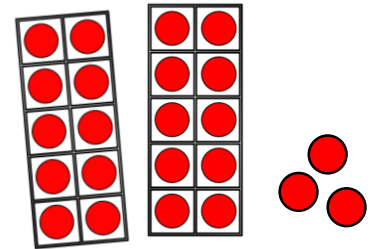

3) The flower is 5 bricks tall.



4) What is $20 - 2$? 18

Flashback 4

1) There are 2 groups of 4 cookies.

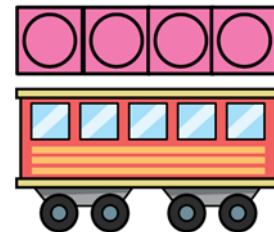


2) One  fills 

How many red buckets will it take to fill



3) The train is 4 cubes long.



4) What is two more than six? **eight**